

Worksheet: Logarithmic Function

1. Find the value of y .

$$(1) \log_5 25 = y \quad (2) \log_3 1 = y \quad (3) \log_{16} 4 = y \quad (4) \log_2 \frac{1}{8} = y$$

$$(5) \log_5 1 = y \quad (6) \log_2 8 = y \quad (7) \log_7 \frac{1}{7} = y \quad (8) \log_3 \frac{1}{9} = y$$

$$(9) \log_y 32 = 5 \quad (10) \log_9 y = -\frac{1}{2} \quad (11) \log_4 \frac{1}{8} = y \quad (12) \log_9 \frac{1}{81} = y$$

2. Evaluate.

$$(1) \log_3 1 \quad (2) \log_4 4 \quad (3) \log_7 7^3 \quad (4) b^{\log_b 3} \quad (5) \log_{25} 5^3 \quad (6) 16^{\log_4 8}$$

3. Write the following expressions in terms of logs of x , y and z .

$$(1) \log x^2 y \quad (2) \log \frac{x^3 y^2}{z} \quad (3) \log \frac{\sqrt{x} \sqrt[3]{y^2}}{z^4} \quad (4) \log xyz$$

$$(5) \log \frac{x}{yz} \quad (6) \log \left(\frac{x}{y} \right)^2 \quad (7) \log (xy)^{\frac{1}{3}} \quad (8) \log x \sqrt{z}$$

$$(9) \log \frac{\sqrt[3]{x}}{\sqrt[3]{yz}} \quad (10) \log \sqrt[4]{\frac{x^3 y^2}{z^4}} \quad (11) \log x \sqrt{\frac{\sqrt{x}}{z}} \quad (12) \log \sqrt{\frac{xy^2}{z^8}}$$

4. Write the following equalities in exponential form.

$$(1) \log_3 81 = 4 \quad (2) \log_7 7 = 1 \quad (3) \log_{\frac{1}{2}} \frac{1}{8} = 3 \quad (4) \log_3 1 = 0$$

$$(5) \log_4 \frac{1}{64} = -3 \quad (6) \log_6 \frac{1}{36} = -2 \quad (7) \log_x y = z \quad (8) \log_m n = \frac{1}{2}$$

5. Write the following equalities in logarithmic form.

$$(1) 8^2 = 64 \quad (2) 10^3 = 10000 \quad (3) 4^{-2} = \frac{1}{16} \quad (4) 3^{-4} = \frac{1}{81}$$

$$(5) \left(\frac{1}{2}\right)^{-5} = 32 \quad (6) \left(\frac{1}{3}\right)^{-3} = 27 \quad (7) x^{2z} = y \quad (8) \sqrt{x} = y$$

6. True or False?

$$(1) \log\left(\frac{x}{y^3}\right) = \log x - 3 \log y \quad (2) \log(a - b) = \log a - \log b \quad (3) \log x^k = k \cdot \log x$$

$$(4) (\log a)(\log b) = \log(a + b) \quad (5) \frac{\log a}{\log b} = \log(a - b) \quad (6) (\ln a)^k = k \cdot \ln a$$

$$(7) \log_a a^a = a \quad (8) -\ln\left(\frac{1}{x}\right) = \ln x \quad (9) \ln_{\sqrt{x}} x^k = 2k$$

7. Solve the following logarithmic equations.

$$(1) \ln x = -3 \quad (2) \log(3x - 2) = 2$$

$$(3) 2 \log x = \log 2 + \log(3x - 4) \quad (4) \log x + \log(x - 1) = \log(4x)$$

$$(5) \log_3(x + 25) - \log_3(x - 1) = 3 \quad (6) \log_9(x - 5) + \log_9(x + 3) = 1$$

$$(7) \log x + \log(x - 3) = 1 \quad (8) \log_2(x - 2) + \log_2(x + 1) = 2$$

8. Prove the following statements.

$$(1) \log_{\sqrt{b}} x = 2 \log_b x \quad (2) \log_{\frac{1}{\sqrt{b}}} \sqrt{x} = -\log_b x \quad (3) \log_{b^4} x^2 = \log_b \sqrt{x}$$

9. Given that $\log 2 = x$, $\log 3 = y$ and $\log 7 = z$, express the following expressions in terms of x , y , and z .

$$(1) \log 12 \quad (2) \log 200 \quad (3) \log \frac{14}{3} \quad (4) \log 0.3$$

$$(5) \log 1.5 \quad (6) \log 10.5 \quad (7) \log 15 \quad (8) \log \frac{6000}{7}$$

10. Solve the following equations.

$$(1) 3^x - 2 = 12 \quad (2) 3^{1-x} = 2$$

$$(3) 4^x = 5^{x+1} \quad (4) 6^{1-x} = 10^x$$

$$(5) 3^{2x+1} = 2^{x-2} \quad (6) \frac{10}{1+e^{-x}} = 2$$

$$(7) 5^{2x} - 5^x - 12 = 0 \quad (8) e^{2x} - 2e^x = 15$$

11. Draw the graph of each of the following logarithmic functions, and analyze each of them completely.

$$(1) f(x) = \log x \quad (2) f(x) = \log -x$$

$$(3) f(x) = -\log(x-3) \quad (4) f(x) = -2 \log_3(3-x)$$

$$(5) f(x) = -\ln(x+1) \quad (6) f(x) = 2 \ln \frac{1}{2}(x+3)$$

$$(7) f(x) = \ln(2x+4) \quad (8) f(x) = -2 \ln(-3x+6)$$

12. Find the inverse of each of the following functions.

(1) $f(x) = \log_2(x - 3) - 5$ (2) $f(x) = 3 \log_3(x + 3) + 1$

(3) $f(x) = -2 \log_2(x - 1) + 2$ (4) $f(x) = -\ln(1 - 2x) + 1$

(5) $f(x) = 2^x - 3$ (6) $f(x) = 2 \cdot 3^{3x} - 1$

(7) $f(x) = -5 \cdot e^{-x} + 2$ (8) $f(x) = 1 - 2e^{-2x}$

13. 15 000\$ is invested in an account that yields 5% interest per year. After how many years will the account be worth 91 221.04\$ if the interest is compounded yearly?

14. 8 000\$ is invested in an account that yields 6% interest per year. After how many years will the account be worth 13709.60\$ if the interest is compounded monthly?

15. Starting at the age of 40, an average man loses 5% of his hair every year. At what age should an average man expect to have half his hair left?

16. A bacteria culture starts with 10 000 bacteria and the number doubles every 40 minutes.

(a) Find a formula for the number of bacteria at time t .

(b) Find the number of bacteria after one hour.

(c) After how many minutes will there be 50 000 bacteria?

ANSWERS

1. (1) 2

(2) 0

(3) $\frac{1}{2}$

(4) -3

(5) 0

(6) 3

(7) -1

(8) -2

(9) 2

(10) $\frac{1}{3}$

(11) $-\frac{3}{2}$

(12) -2

2. (1) 0

(2) 1

(3) 3

(4) 3

(5) $\frac{3}{2}$

(6) 64

3. (1) $2\log x + \log y$

(2) $3\log x + 2\log y - \log z$

(3) $\frac{1}{2}\log x + \frac{2}{3}\log y - 4\log z$

(4) $\log x + \log y + \log z$

(5) $\log x - \log y - \log z$

(6) $2\log x - 2\log y$

(7) $\frac{1}{3}\log x + \frac{1}{3}\log y$

(8) $\log x + \frac{1}{2}\log z$

(9) $\frac{1}{3}(\log x - \log y - \log z)$

(10) $\frac{1}{4}\log x + \frac{1}{2}\log y - \log z$

(11) $\frac{5}{4}\log x - \frac{1}{2}\log z$

(12) $\frac{1}{2}\log x + \log y - 4\log z$

4. (1) $3^4 = 81$

(2) $7^1 = 7$

(3) $\left(\frac{1}{2}\right)^3 = \frac{1}{8}$

(4) $3^0 = 1$

(5) $4^{-3} = \frac{1}{64}$

(6) $6^{-2} = \frac{1}{36}$

(7) $x^z = y$

(8) $m^{\frac{1}{2}} = n$

5. (1) $\log_8 64 = 2$

(2) $\log_{10} 10000 = 3$

(3) $\log_4 \frac{1}{16} = -2$

(4) $\log_3 \frac{1}{81} = -4$

(5) $\log_{\frac{1}{2}} 32 = -5$

(6) $\log_{\frac{1}{3}} 27 = -3$

(7) $\log_x y = 2z$

(8) $\log_x y = \frac{1}{2}$

6. (1) True

(2) False

(3) True

(4) False

(5) False

(6) False

(7) True

(8) True

7. (1) $S = \{e^{-3}\}$

(2) $S = \{34\}$

(3) $S = \{2, 4\}$

(4) $S = \{5\}$

(5) $S = \{2\}$

(6) $S = \{6\}$

(7) $S = \{5\}$

(8) $S = \{3\}$

8. (1)

$$\log_{\sqrt{b}} x = 2 \log_b x$$

$$\begin{aligned} \log_{\sqrt{b}} x &= \frac{\log x}{\log \sqrt{b}} \\ &= \frac{\log x}{\frac{1}{2} \log b} \\ &= 2 \frac{\log x}{\log b} \\ &= 2 \log_b x \quad \square \end{aligned}$$

(2)

$$\log_{\frac{1}{\sqrt{b}}} \sqrt{x} = -\log_b x$$

$$\begin{aligned} \log_{\frac{1}{\sqrt{b}}} \sqrt{x} &= \frac{\log \sqrt{x}}{\log \frac{1}{\sqrt{b}}} \\ &= \frac{\frac{1}{2} \log x}{-\frac{1}{2} \log b} \\ &= -\frac{\log x}{\log b} \\ &= -\log_b x \quad \square \end{aligned}$$

(3)

$$\log_{b^4} x^2 = \log_b \sqrt{x}$$

$$\begin{aligned} \log_{b^4} x^2 &= \frac{\log x^2}{\log b^4} \\ &= \frac{2 \log x}{4 \log b} \\ &= \frac{1 \log x}{2 \log b} \\ &= \frac{1}{2} \log_b x \\ &= \log_b \sqrt{x} \quad \square \end{aligned}$$

9. (1) $2x + y$

(2) $x + 2$

(3) $x - y + z$

(4) $y - 1$

(5) $y - x$

(6) $y + z - x$

(7) $1 - x + y$

(8) $x + y - z + 3$

10. (1) $S = \{2.402\}$

(2) $S = \{0.369\}$

(3) $S = \{-7.213\}$

(4) $S = \{0.438\}$

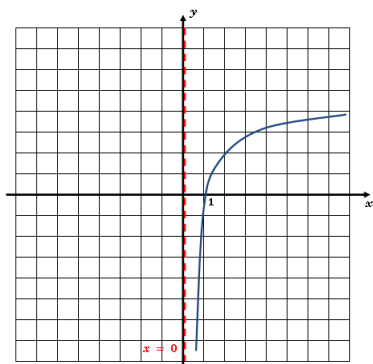
(5) $S = \{-1.652\}$

(6) $S = \{-\ln 4\}$

(7) $S = \{\log_5 4\}$

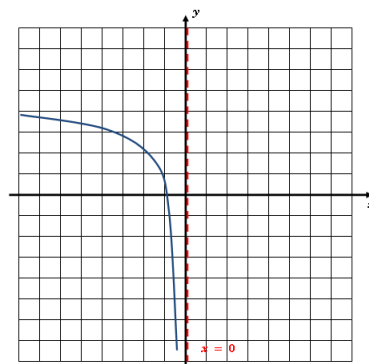
(8) $S = \{\ln 5\}$

11. (1)



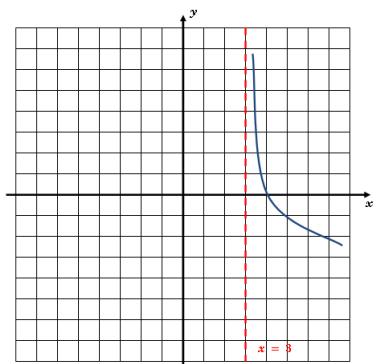
$\text{Dom}(f) =]0, +\infty[$
 $\text{R}(f) = \mathbb{R}$
 Zeros: 1
 Y-intercept: None
 Variation:
 $f(x) \nearrow$ if $x \in]0, +\infty[$
 $f(x) \searrow$ if $x \in \emptyset$
 Extremums: Max: None, Min: None
 Sign:
 $f(x) \geq 0$ if $x \in]0, 1]$
 $f(x) \leq 0$ if $x \in [1, +\infty[$

(2)



$\text{Dom}(f) =]-\infty, 0[$
 $\text{R}(f) = \mathbb{R}$
 Zeros: -1
 Y-intercept: None
 Variation:
 $f(x) \nearrow$ if $x \in \emptyset$
 $f(x) \searrow$ if $x \in]-\infty, 0[$
 Extremums: Max: None, Min: None
 Sign:
 $f(x) \geq 0$ if $x \in]-\infty, -1]$
 $f(x) \leq 0$ if $x \in [-1, 0[$

(3)



$$\text{Dom}(f) =]3, +\infty[$$

$$\text{R}(f) = \mathbb{R}$$

Zeros: 4

Y-intercept: None

Variation:

$$f(x) \nearrow \text{ if } x \in \emptyset$$

$$f(x) \searrow \text{ if } x \in]3, +\infty[$$

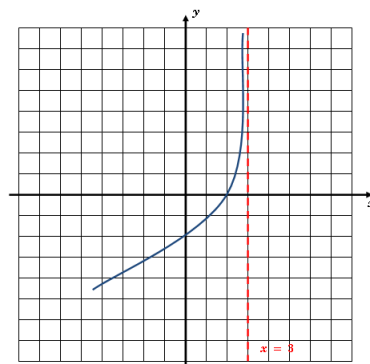
Extremums: Max: None, Min: None

Sign:

$$f(x) \geq 0 \text{ if } x \in]3, 4]$$

$$f(x) \leq 0 \text{ if } x \in [4, +\infty[$$

(4)



$$\text{Dom}(f) =]-\infty, 3[$$

$$\text{R}(f) = \mathbb{R}$$

Zeros: 2

Y-intercept: -2

Variation:

$$f(x) \nearrow \text{ if } x \in]-\infty, 3[$$

$$f(x) \searrow \text{ if } x \in \emptyset$$

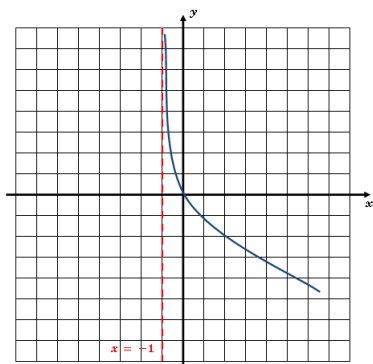
Extremums: Max: None, Min: None

Sign:

$$f(x) \geq 0 \text{ if } x \in]2, 3[$$

$$f(x) \leq 0 \text{ if } x \in]-\infty, 2[$$

(5)



$$\text{Dom}(f) =] - 1, +\infty[$$

$$\text{R}(f) = \mathbb{R}$$

$$\text{Zeros: } 0$$

$$\text{Y-intercept: } 0$$

Variation:

$$f(x) \nearrow \text{ if } x \in \emptyset$$

$$f(x) \searrow \text{ if } x \in] - 1, +\infty[$$

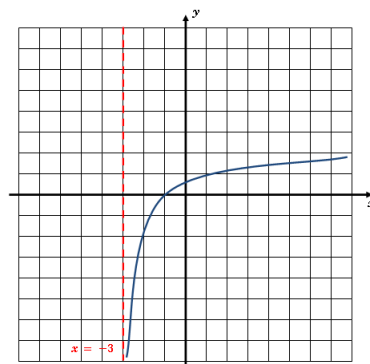
Extremums: Max: None, Min: None

Sign:

$$f(x) \geq 0 \text{ if } x \in] - 1, 0[$$

$$f(x) \leq 0 \text{ if } x \in] 0, +\infty[$$

(6)



$$\text{Dom}(f) =] - 3, +\infty[$$

$$\text{R}(f) = \mathbb{R}$$

$$\text{Zeros: } -1$$

$$\text{Y-intercept: } 2 \ln \frac{3}{2}$$

Variation:

$$f(x) \nearrow \text{ if } x \in] - 3, +\infty[$$

$$f(x) \searrow \text{ if } x \in \emptyset$$

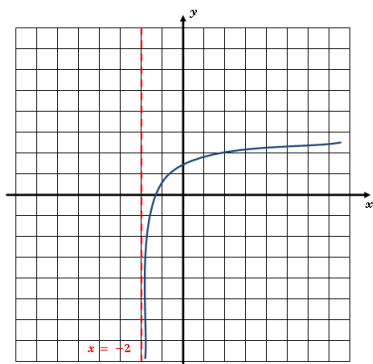
Extremums: Max: None, Min: None

Sign:

$$f(x) \geq 0 \text{ if } x \in [-1, +\infty[$$

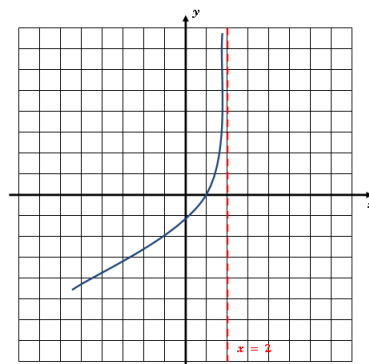
$$f(x) \leq 0 \text{ if } x \in] - 3, -1]$$

(7)



$\text{Dom}(f) =] - 2, +\infty[$
 $\text{R}(f) = \mathbb{R}$
Zeros: -1.5
Y-intercept: $\ln 4$
Variation:
 $f(x) \nearrow$ if $x \in] - 2, +\infty[$
 $f(x) \searrow$ if $x \in \emptyset$
Extremums: Max: None, Min: None
Sign:
 $f(x) \geq 0$ if $x \in [-1.5, +\infty[$
 $f(x) \leq 0$ if $x \in] - 2, -1.5]$

(8)



$\text{Dom}(f) =] - \infty, 2[$
 $\text{R}(f) = \mathbb{R}$
Zeros: $\frac{5}{3}$
Y-intercept: $-2 \ln 6$
Variation:
 $f(x) \nearrow$ if $x \in] - \infty, 2[$
 $f(x) \searrow$ if $x \in \emptyset$
Extremums: Max: None, Min: None
Sign:
 $f(x) \geq 0$ if $x \in [\frac{5}{3}, 2[$
 $f(x) \leq 0$ if $x \in] - \infty, \frac{5}{3}]$

12. (1) $f^{-1}(x) = 2^{x+5} + 3$
- (2) $f^{-1}(x) = 3^{\frac{x-1}{3}} - 3$
- (3) $f^{-1}(x) = \frac{1}{2}10^{\frac{2-x}{2}} + 1$
- (4) $f^{-1}(x) = -\frac{1}{2}e^{1-x} + \frac{1}{2}$
- (5) $f^{-1}(x) = \log_2(x + 3)$
- (6) $f^{-1}(x) = \frac{1}{3}\log_3\left(\frac{x+1}{2}\right)$
- (7) $f^{-1}(x) = -\ln\left(\frac{2-x}{5}\right)$
- (8) $f^{-1}(x) = -\frac{1}{2}\ln\left(\frac{1-x}{2}\right)$

13. 37 years.

14. 9 years.

15. 53 years old.

16. (a) $f(t) = 10000 \cdot 2^{1.5t}$. Where t is the number of hours.
- (b) 28 284 bacteria.
- (c) 92.88 minutes.